

Name _____

Date _____

Counting Coins



Color the coins to match the amount given.

12¢



34¢



23¢



21¢



14¢



33¢



42¢



44¢



HOW MUCH DO YOU HAVE?
Draw a line to match the coin total on the right

1.



A. 36¢

2.



B. 27¢

3.



C. 31¢

4.



D. 35¢

5.



E. 45¢

6.



F. 30¢

7.



G. 20¢

8.



H. 16¢

9.



I. 12¢

10.




J. 7¢


Counting Coins

Name: _____


Count the coins then draw a line to the item you can purchase for that exact price.





\$1.36 

\$1.61 


\$1.14 

\$1.42 

\$1.76 

\$1.50 

\$1.45 

\$1.26 

\$1.27 

\$1.47 

 +  +  = 16¢

 +  +  =

 +  +  =

 +  +  +  =

 +  +  +  =

 +  +  +  =

 +  +  +  =

 +  +  +  =

Counting Coins

Name: _____

How much money in each piggy bank?



\$.



\$.



\$.



\$.



\$.



\$.