

Name :

Score : Date :

Greater than, Less than or Equal to

Direction: Use $<$, $>$ or $=$ to make each statement true

12 ○ 121

333 ○ 131

80 ○ 20

98 ○ 98

53 ○ 73

49 ○ 29

77 ○ 77

0 ○ 101

35 ○ 39

111 ○ 11

21 ○ 12

78 ○ 88

33 ○ 30

100 ○ 10

Name: _____

Date: _____

GREATER THAN or LESS THAN

Greater Than and Less Than symbols are used to compare numbers.

The Greater Than symbol is $>$ and the Less Than symbol is $<$



Example: $5 < 7$ Five is LESS than 6



Write $<$ or $>$ in the box for each problem.

7 9

2 4

9 3

4 7

6 9

6 5

Name :

Date :

GREATER OR LESS THAN WORKSHEET

Solved :

12 < 18

12 is less than 18

21 > 11

21 is greater than 11

15

25

57

51

60

70

10

11

36

37

9

7

8

1

9

10

100

90

70

71

79

89

3

4

12

16

1

11

21

22

62

21

85

86

31


33

Greater Than or Less Than

Directions: Compare each pair of numbers and write the sign that makes each equation correct.





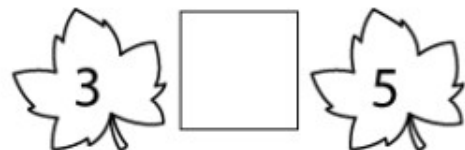




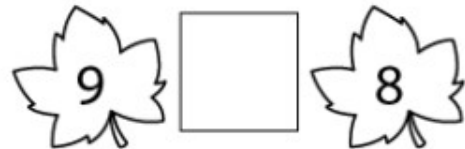
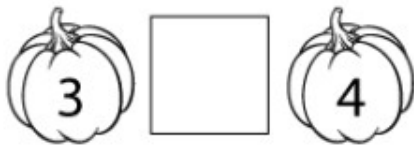
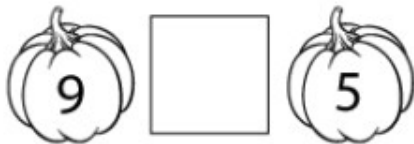
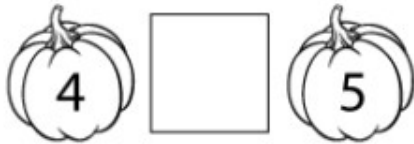

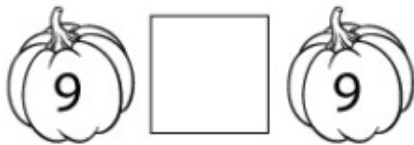

Greater Than



Equal To



Less Than



Name :

Score : Date :

Less Than, Equal to or Greater Than

Choose the correct operation that makes the number sentence correct

SIGNS: '<' '=' '>'

$45 \square 45$

$23 \square 27$

$30 \square 3$

$14 \square 41$

$29 \square 28$

$101 \square 110$

$6 \square 66$

$90 \square 81$

$10 \square 11$

$71 \square 17$

$28 \square 31$

$99 \square 91$

$82 \square 88$

$18 \square 21$

$66 \square 77$

$333 \square 337$

$10 \square 11$

$19 \square 17$

Name :

Date :

GREATER OR LESS THAN WORKSHEET

Solved :

12 < 18

12 is less than 18

21 > 11

21 is greater than 11

15

25

57

51

60

70

10

11

36

37

9

7

8

1

9

10

100

90

70

71

79

89

3

4

12

16

1

11

21

22

62






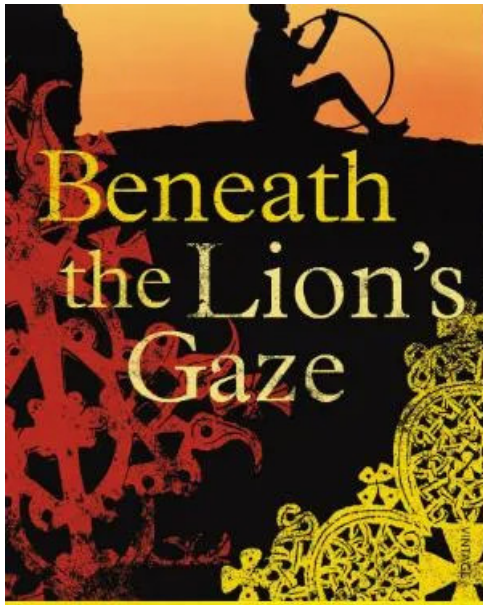
21

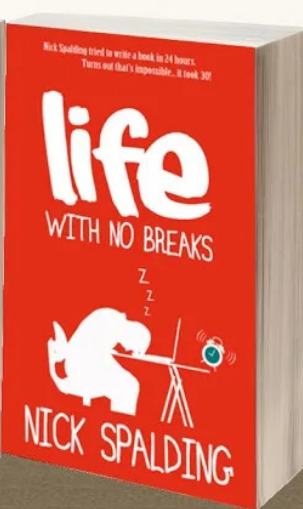

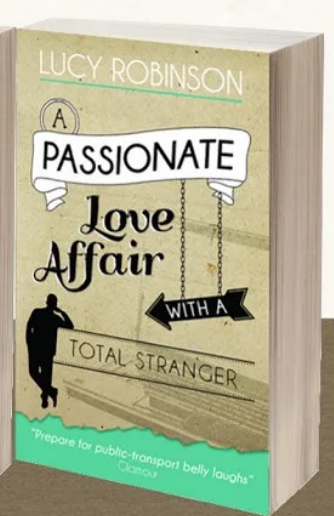



85

86

31

33


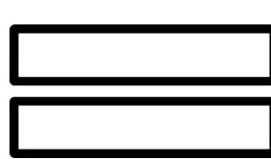






Name: _____

Greater Than, Less Than, Equal To



Directions: Fill in each circle with the correct sign.

<p>> is greater than</p> 	<p>= is equal to</p> 	<p>< is less than</p> 
---	--	--

2 ○ 1	4 ○ 9	3 ○ 3
10 ○ 5	7 ○ 6	8 ○ 2
9 ○ 9	1 ○ 3	2 ○ 1
8 ○ 4	6 ○ 6	7 ○ 10
7 ○ 3	9 ○ 2	1 ○ 

Name :

Date :

Greater Than  Less Than 
Equal To = Worksheet

Use the correct symbol in the box

2 4

19 21

59 49

44 30

16 12

19 91

12 10

8 8

10 20

66 68

6 16

4 41

22 22

99 90

37 35

81 80

30 39

31 33

1 11

99 99

84 87