



















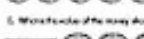

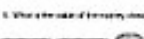
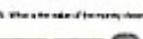
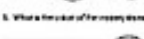





U.S. Bills and Coins


Value of Money: U.S.	Value of Money: U.S.	Value of Money: U.S.	Value of Money: U.S.	Value of Money: U.S.
1. What is the value of the money shown? 	1. What is the value of the money shown? 	1. What is the value of the money shown? 	1. What is the value of the money shown? 	1. What is the value of the money shown? 
2. What is the value of the money shown? 	2. What is the value of the money shown? 	2. What is the value of the money shown? 	2. What is the value of the money shown? 	2. What is the value of the money shown? 
3. What is the value of the money shown? 	3. What is the value of the money shown? 	3. What is the value of the money shown? 	3. What is the value of the money shown? 	3. What is the value of the money shown? 
4. What is the value of the money shown? 	4. What is the value of the money shown? 	4. What is the value of the money shown? 	4. What is the value of the money shown? 	4. What is the value of the money shown? 
5. What is the value of the money shown? 	5. What is the value of the money shown? 	5. What is the value of the money shown? 	5. What is the value of the money shown? 	5. What is the value of the money shown? 


Value of Money: U.S. Bills and Coins


1. What is the value of the money shown?


2. What is the value of the money shown?





































3. What is the value of the money shown?


4. What is the value of the money shown?


5. What is the value of the money shown?




2nd Grade

U.S.		U.S.		U.S.	
1. What is the value of the following? 	8. What is the value of the following? 	1. What is the value of the following? 	7. What is the value of the following? 	1. What is the value of the following? 	7. What is the value of the following? 
2. What is the value of the following? 	9. What is the value of the following? 	2. What is the value of the following? 	8. What is the value of the following? 	2. What is the value of the following? 	8. What is the value of the following? 
3. What is the value of the following? 	10. What is the value of the following? 	3. What is the value of the following? 	9. What is the value of the following? 	3. What is the value of the following? 	9. What is the value of the following? 
4. What is the value of the following? 		4. What is the value of the following? 	10. What is the value of the following? 	4. What is the value of the following? 	10. What is the value of the following? 
5. What is the value of the following? 		5. What is the value of the following? 		5. What is the value of the following? 	5. What is the value of the following? 
6. What is the value of the following? 		6. What is the value of the following? 		6. What is the value of the following? 	6. What is the value of the following? 
7. What is the value of the following? 		7. What is the value of the following? 		7. What is the value of the following? 	7. What is the value of the following? 



Counting Dollar Amounts

Name: _____

Date: _____















IDENTIFYING COINS

Name: _____

Familiarize yourself with the different US coins and their values.

Fill in the blanks.



Coin name: _____

Coin value: _____



Coin name: _____

Coin value: _____



Coin name: _____


Coin value: _____




Coin name: _____

Coin value: _____

Draw a nickel:



Draw a penny:



Name : _____

Date : _____

Count the Money

1)



\$ _____



2)



\$ _____



3)



\$ _____



4)



\$ _____



5)



\$ _____



Identifying Coins Worksheet

Name: _____

Identifying US Coins

Familiarize yourself with the different US coins and their values. Then, write on the blank line which coins you will use to pay for these items.

A

PENNY

1¢ = \$0.01



B

NICKEL

5¢ = \$0.05



C

DIME

10¢ = \$0.10



D

QUARTER

25¢ = \$0.25



①



25¢

⑤



1¢

②



5¢

⑥



10¢

③



1¢

⑦



25¢

④



5¢

⑧



10¢
